

Name _____

Date _____

*Refer to Help Card 3-1 if needed

1)



one penny



front

back

$$\underline{1\text{¢}} = \underline{\$.01}$$

2)



$$= \underline{3\text{¢}}$$
$$= \underline{\$.03}$$

$$\underline{3\text{¢}}$$

3)



$$= \underline{\quad}\text{¢}$$
$$= \underline{\$.\quad}$$

$$\underline{2\text{¢}}$$

4)



$$= \underline{\quad}\text{¢}$$



¢

$$= \underline{\$.\quad}$$

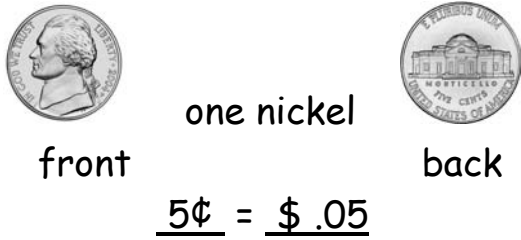
Name _____

Date _____

5)




6)



7)



8)



Name _____

Date _____


Decimals 3
Dollars and Cents
DEC309

9)



 ¢ + ¢ = ¢
= \$.

10)



 ¢ + ¢ = ¢
= \$.
